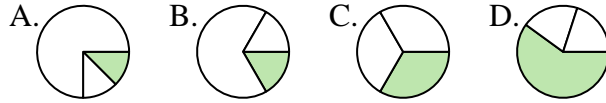




Determine which letter best represents each fraction.

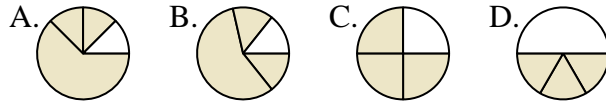
Answers

1) Which choice best shows $\frac{1}{3}$?



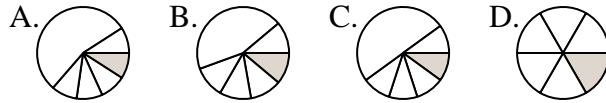
1. _____

2) Which choice best shows $\frac{3}{4}$?



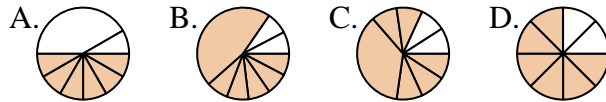
2. _____

3) Which choice best shows $\frac{1}{6}$?



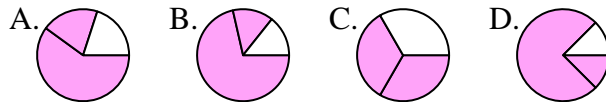
4. _____

4) Which choice best shows $\frac{6}{8}$?



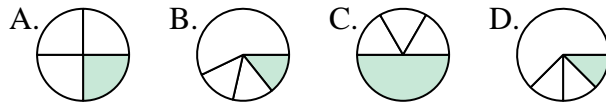
5. _____

5) Which choice best shows $\frac{2}{3}$?



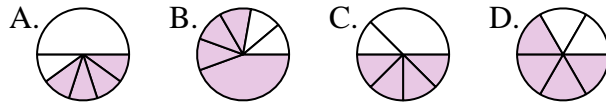
7. _____

6) Which choice best shows $\frac{1}{4}$?



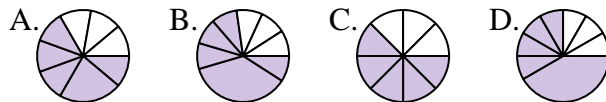
9. _____

7) Which choice best shows $\frac{4}{6}$?



10. _____

8) Which choice best shows $\frac{5}{8}$?



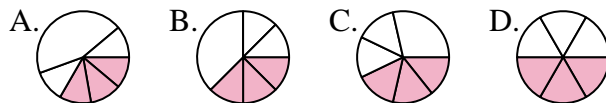
11. _____

9) Which choice best shows $\frac{2}{4}$?

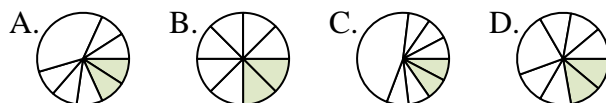


12. _____

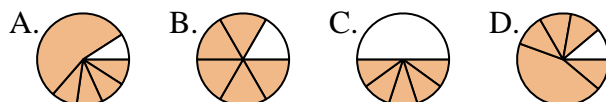
10) Which choice best shows $\frac{3}{6}$?



11) Which choice best shows $\frac{2}{8}$?



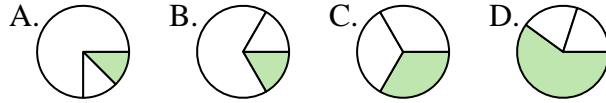
12) Which choice best shows $\frac{5}{6}$?



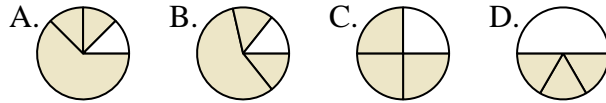


Determine which letter best represents each fraction.

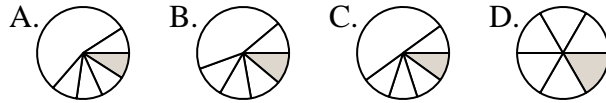
1) Which choice best shows $\frac{1}{3}$?



2) Which choice best shows $\frac{3}{4}$?



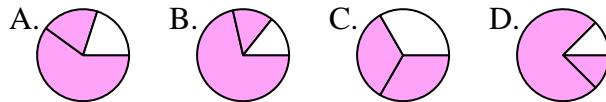
3) Which choice best shows $\frac{1}{6}$?



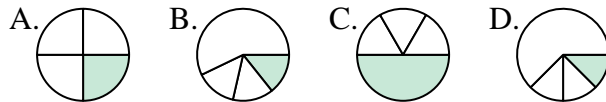
4) Which choice best shows $\frac{6}{8}$?



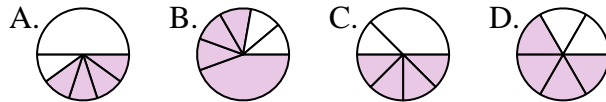
5) Which choice best shows $\frac{2}{3}$?



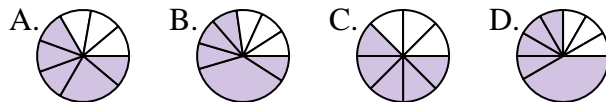
6) Which choice best shows $\frac{1}{4}$?



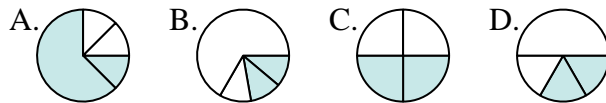
7) Which choice best shows $\frac{4}{6}$?



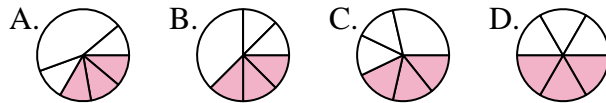
8) Which choice best shows $\frac{5}{8}$?



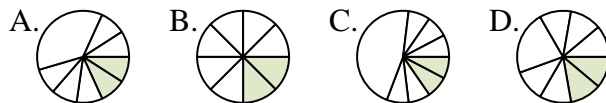
9) Which choice best shows $\frac{2}{4}$?



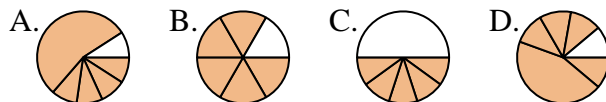
10) Which choice best shows $\frac{3}{6}$?



11) Which choice best shows $\frac{2}{8}$?



12) Which choice best shows $\frac{5}{6}$?



Answers

1. **C**

2. **C**

3. **D**

4. **D**

5. **C**

6. **A**

7. **D**

8. **C**

9. **C**

10. **D**

11. **B**

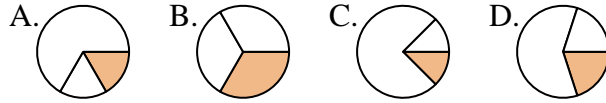
12. **B**



Determine which letter best represents each fraction.

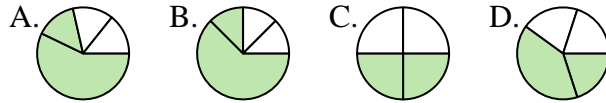
Answers

1) Which choice best shows $\frac{1}{3}$?



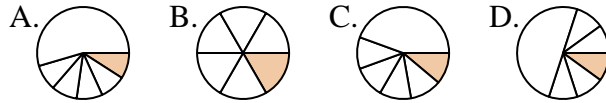
1. _____

2) Which choice best shows $\frac{2}{4}$?



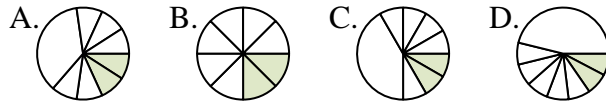
2. _____

3) Which choice best shows $\frac{1}{6}$?



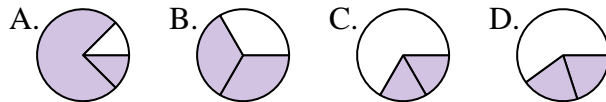
4. _____

4) Which choice best shows $\frac{2}{8}$?



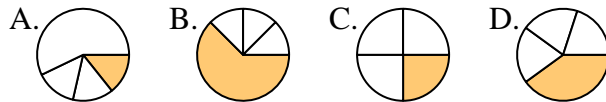
5. _____

5) Which choice best shows $\frac{2}{3}$?



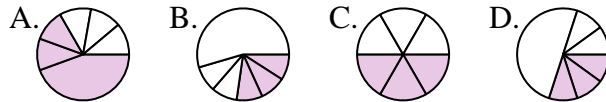
6. _____

6) Which choice best shows $\frac{1}{4}$?



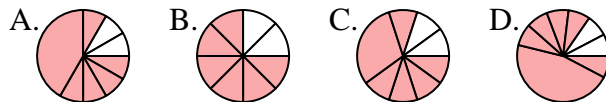
7. _____

7) Which choice best shows $\frac{3}{6}$?



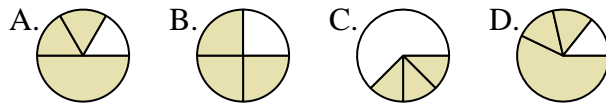
8. _____

8) Which choice best shows $\frac{6}{8}$?



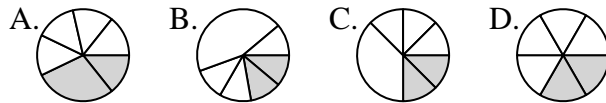
9. _____

9) Which choice best shows $\frac{3}{4}$?



10. _____

10) Which choice best shows $\frac{2}{6}$?



11. _____

11) Which choice best shows $\frac{3}{8}$?



12. _____

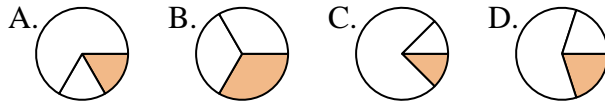
12) Which choice best shows $\frac{4}{6}$?



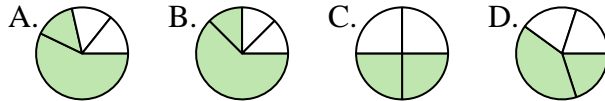


Determine which letter best represents each fraction.

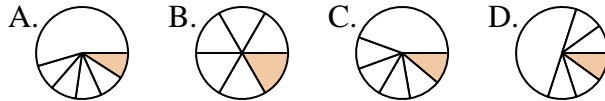
1) Which choice best shows $\frac{1}{3}$?



2) Which choice best shows $\frac{2}{4}$?



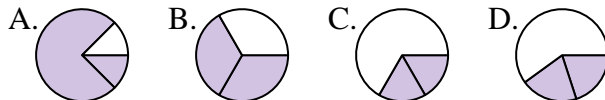
3) Which choice best shows $\frac{1}{6}$?



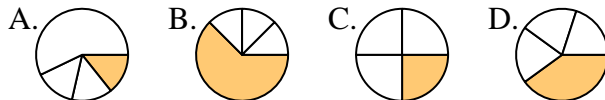
4) Which choice best shows $\frac{2}{8}$?



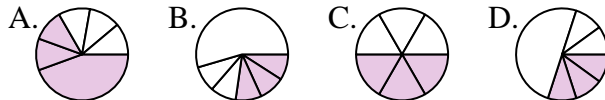
5) Which choice best shows $\frac{2}{3}$?



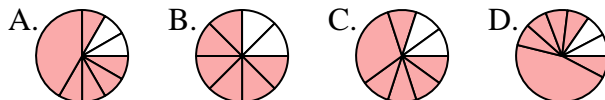
6) Which choice best shows $\frac{1}{4}$?



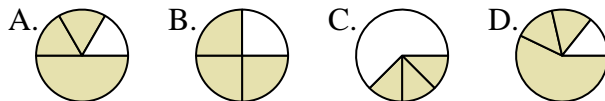
7) Which choice best shows $\frac{3}{6}$?



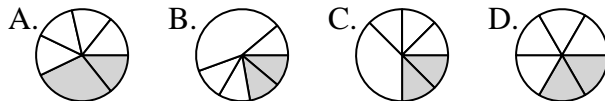
8) Which choice best shows $\frac{6}{8}$?



9) Which choice best shows $\frac{3}{4}$?



10) Which choice best shows $\frac{2}{6}$?



11) Which choice best shows $\frac{3}{8}$?



12) Which choice best shows $\frac{4}{6}$?



Answers

1. **B**

2. **C**

3. **B**

4. **B**

5. **B**

6. **C**

7. **C**

8. **B**

9. **B**

10. **D**

11. **A**

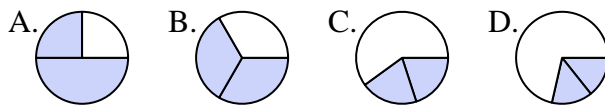
12. **A**



Determine which letter best represents each fraction.

Answers

1) Which choice best shows $\frac{2}{3}$?



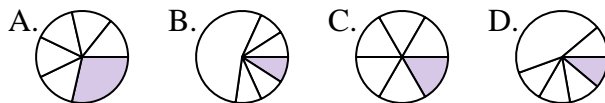
1. _____

2) Which choice best shows $\frac{3}{4}$?



2. _____

3) Which choice best shows $\frac{1}{6}$?



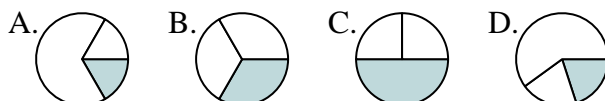
4. _____

4) Which choice best shows $\frac{3}{8}$?



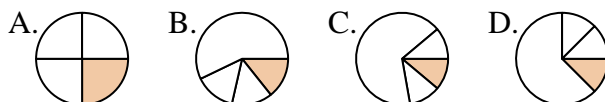
6. _____

5) Which choice best shows $\frac{1}{3}$?



7. _____

6) Which choice best shows $\frac{1}{4}$?



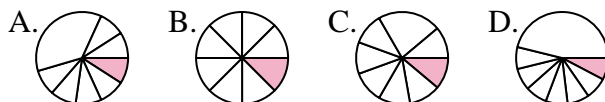
9. _____

7) Which choice best shows $\frac{4}{6}$?



10. _____

8) Which choice best shows $\frac{1}{8}$?



12. _____

9) Which choice best shows $\frac{2}{4}$?



10) Which choice best shows $\frac{2}{6}$?



11) Which choice best shows $\frac{2}{8}$?



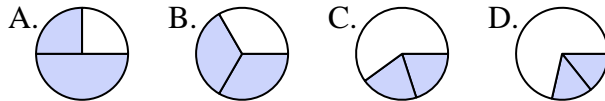
12) Which choice best shows $\frac{5}{6}$?



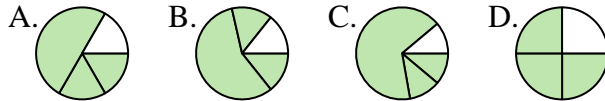


Determine which letter best represents each fraction.

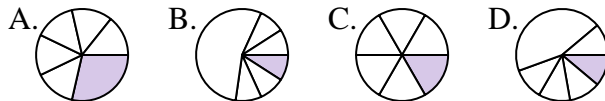
1) Which choice best shows $\frac{2}{3}$?



2) Which choice best shows $\frac{3}{4}$?



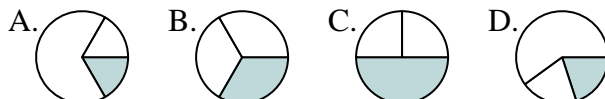
3) Which choice best shows $\frac{1}{6}$?



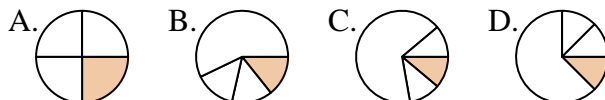
4) Which choice best shows $\frac{3}{8}$?



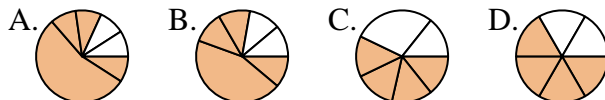
5) Which choice best shows $\frac{1}{3}$?



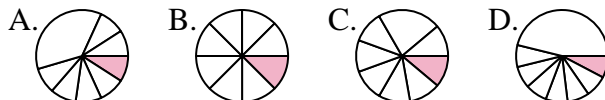
6) Which choice best shows $\frac{1}{4}$?



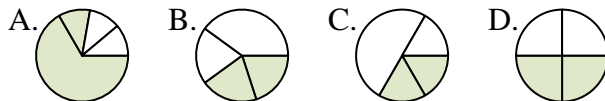
7) Which choice best shows $\frac{4}{6}$?



8) Which choice best shows $\frac{1}{8}$?



9) Which choice best shows $\frac{2}{4}$?



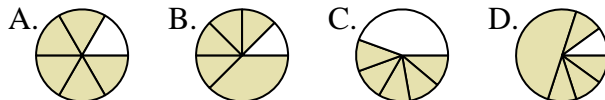
10) Which choice best shows $\frac{2}{6}$?



11) Which choice best shows $\frac{2}{8}$?



12) Which choice best shows $\frac{5}{6}$?



Answers

1. **B**

2. **D**

3. **C**

4. **A**

5. **B**

6. **A**

7. **D**

8. **B**

9. **D**

10. **C**

11. **C**

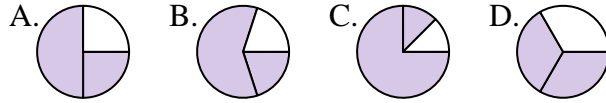
12. **A**



Determine which letter best represents each fraction.

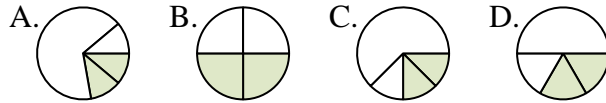
Answers

1) Which choice best shows $\frac{2}{3}$?



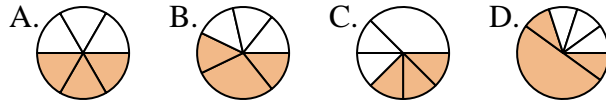
1. _____

2) Which choice best shows $\frac{2}{4}$?



2. _____

3) Which choice best shows $\frac{3}{6}$?



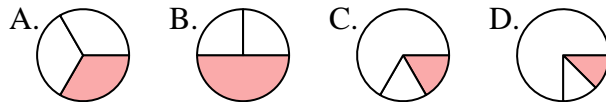
4. _____

4) Which choice best shows $\frac{3}{8}$?



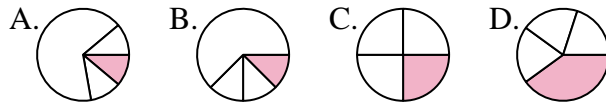
5. _____

5) Which choice best shows $\frac{1}{3}$?



7. _____

6) Which choice best shows $\frac{1}{4}$?



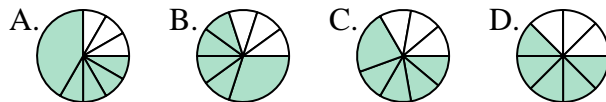
8. _____

7) Which choice best shows $\frac{4}{6}$?



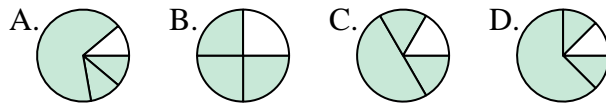
9. _____

8) Which choice best shows $\frac{5}{8}$?



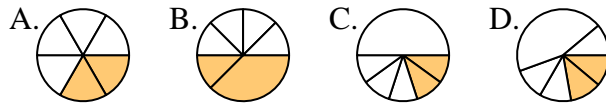
10. _____

9) Which choice best shows $\frac{3}{4}$?



11. _____

10) Which choice best shows $\frac{2}{6}$?

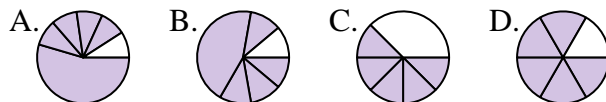


12. _____

11) Which choice best shows $\frac{7}{8}$?



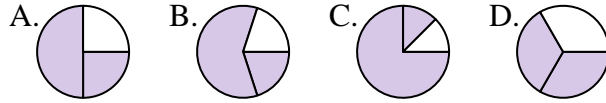
12) Which choice best shows $\frac{5}{6}$?



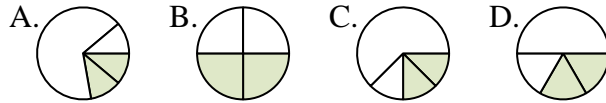


Determine which letter best represents each fraction.

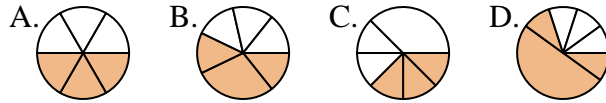
1) Which choice best shows $\frac{2}{3}$?



2) Which choice best shows $\frac{2}{4}$?



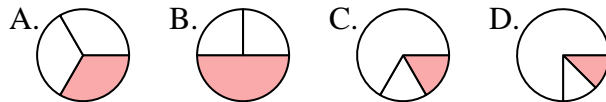
3) Which choice best shows $\frac{3}{6}$?



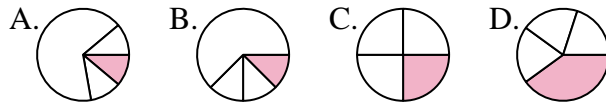
4) Which choice best shows $\frac{3}{8}$?



5) Which choice best shows $\frac{1}{3}$?



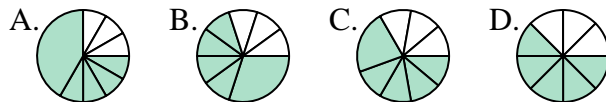
6) Which choice best shows $\frac{1}{4}$?



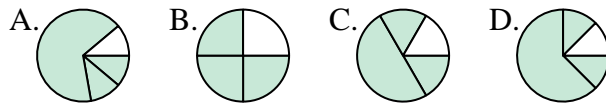
7) Which choice best shows $\frac{4}{6}$?



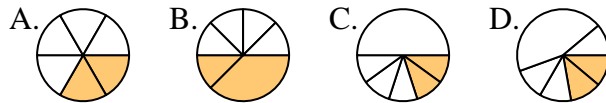
8) Which choice best shows $\frac{5}{8}$?



9) Which choice best shows $\frac{3}{4}$?



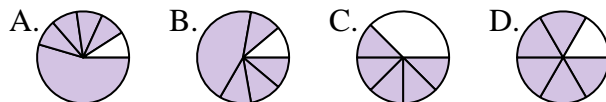
10) Which choice best shows $\frac{2}{6}$?



11) Which choice best shows $\frac{7}{8}$?



12) Which choice best shows $\frac{5}{6}$?



Answers

1. **D**

2. **B**

3. **A**

4. **C**

5. **A**

6. **C**

7. **A**

8. **D**

9. **B**

10. **A**

11. **A**

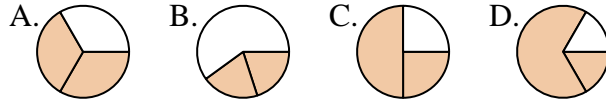
12. **D**



Determine which letter best represents each fraction.

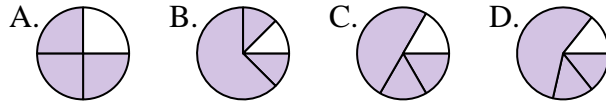
Answers

1) Which choice best shows $\frac{2}{3}$?



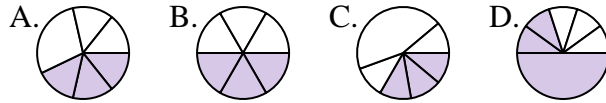
1. _____

2) Which choice best shows $\frac{3}{4}$?



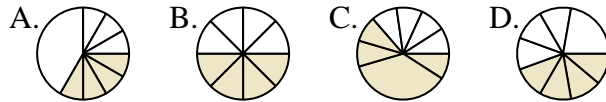
2. _____

3) Which choice best shows $\frac{3}{6}$?



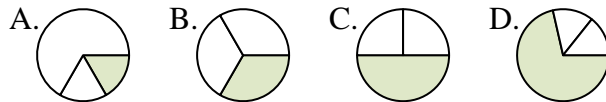
3. _____

4) Which choice best shows $\frac{4}{8}$?



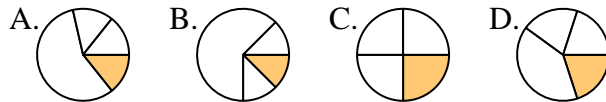
4. _____

5) Which choice best shows $\frac{1}{3}$?



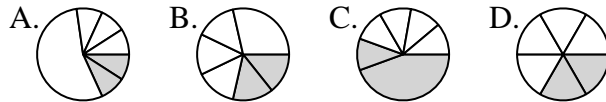
5. _____

6) Which choice best shows $\frac{1}{4}$?



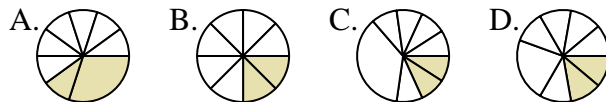
6. _____

7) Which choice best shows $\frac{2}{6}$?



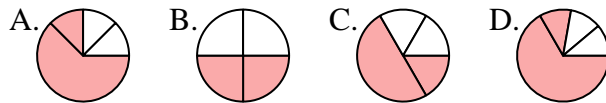
7. _____

8) Which choice best shows $\frac{2}{8}$?



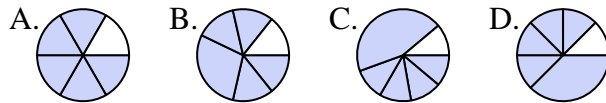
8. _____

9) Which choice best shows $\frac{2}{4}$?



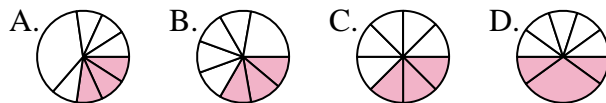
9. _____

10) Which choice best shows $\frac{5}{6}$?



10. _____

11) Which choice best shows $\frac{3}{8}$?



11. _____

12) Which choice best shows $\frac{1}{6}$?

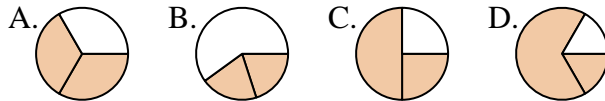


12. _____

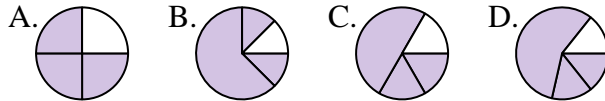


Determine which letter best represents each fraction.

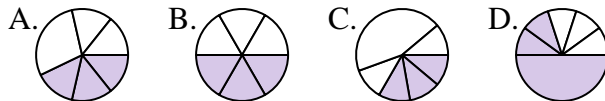
1) Which choice best shows $\frac{2}{3}$?



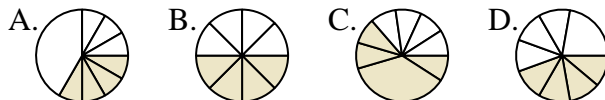
2) Which choice best shows $\frac{3}{4}$?



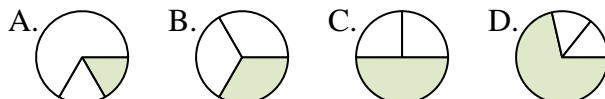
3) Which choice best shows $\frac{3}{6}$?



4) Which choice best shows $\frac{4}{8}$?



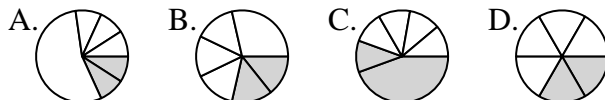
5) Which choice best shows $\frac{1}{3}$?



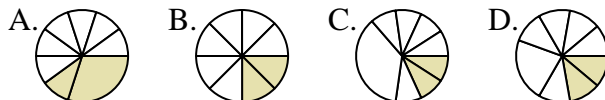
6) Which choice best shows $\frac{1}{4}$?



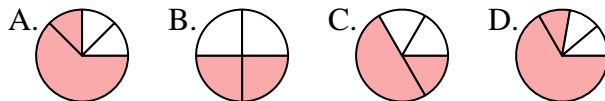
7) Which choice best shows $\frac{2}{6}$?



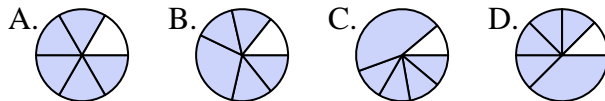
8) Which choice best shows $\frac{2}{8}$?



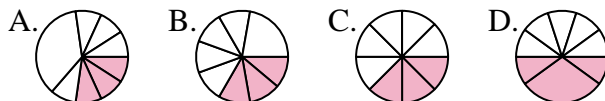
9) Which choice best shows $\frac{2}{4}$?



10) Which choice best shows $\frac{5}{6}$?



11) Which choice best shows $\frac{3}{8}$?



12) Which choice best shows $\frac{1}{6}$?



Answers

1. **A**

2. **A**

3. **B**

4. **B**

5. **B**

6. **C**

7. **D**

8. **B**

9. **B**

10. **A**

11. **C**

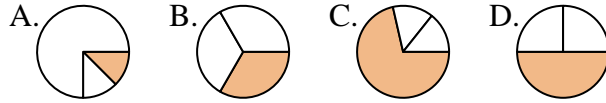
12. **A**



Determine which letter best represents each fraction.

Answers

1) Which choice best shows $\frac{1}{3}$?



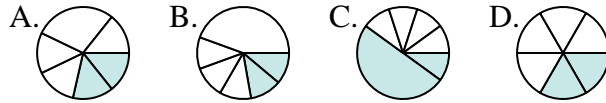
1. _____

2) Which choice best shows $\frac{2}{4}$?



2. _____

3) Which choice best shows $\frac{2}{6}$?



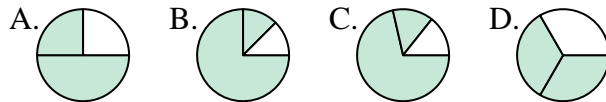
3. _____

4) Which choice best shows $\frac{6}{8}$?



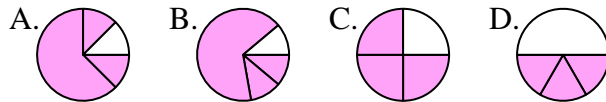
4. _____

5) Which choice best shows $\frac{2}{3}$?



5. _____

6) Which choice best shows $\frac{3}{4}$?



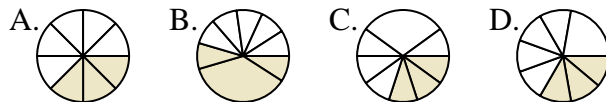
6. _____

7) Which choice best shows $\frac{3}{6}$?



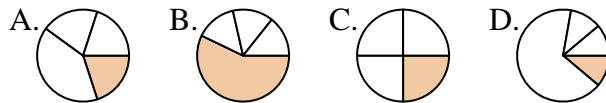
7. _____

8) Which choice best shows $\frac{3}{8}$?



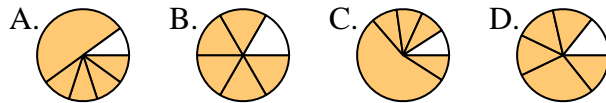
8. _____

9) Which choice best shows $\frac{1}{4}$?



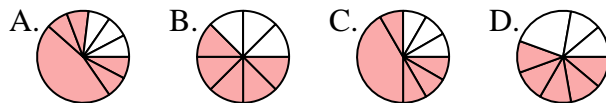
9. _____

10) Which choice best shows $\frac{5}{6}$?



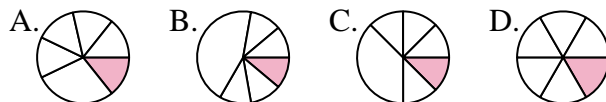
10. _____

11) Which choice best shows $\frac{5}{8}$?



11. _____

12) Which choice best shows $\frac{1}{6}$?



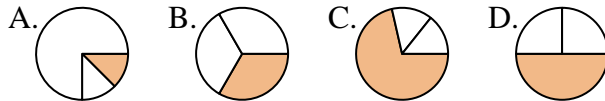
12. _____



Determine which letter best represents each fraction.

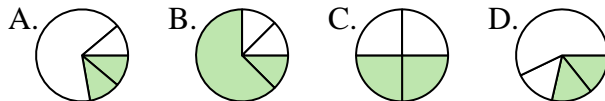
Answers

1) Which choice best shows $\frac{1}{3}$?



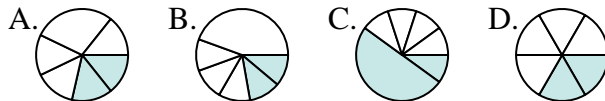
1. **B**

2) Which choice best shows $\frac{2}{4}$?



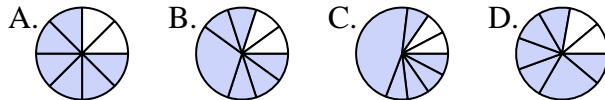
2. **C**

3) Which choice best shows $\frac{2}{6}$?



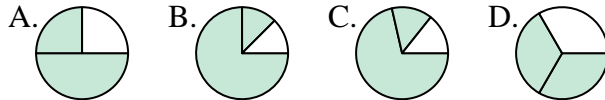
3. **D**

4) Which choice best shows $\frac{6}{8}$?



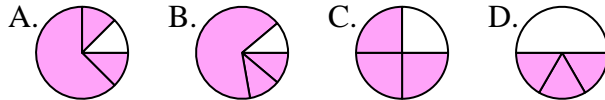
4. **A**

5) Which choice best shows $\frac{2}{3}$?



5. **D**

6) Which choice best shows $\frac{3}{4}$?



6. **C**

7) Which choice best shows $\frac{3}{6}$?



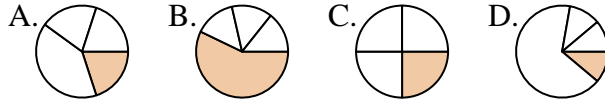
7. **A**

8) Which choice best shows $\frac{3}{8}$?



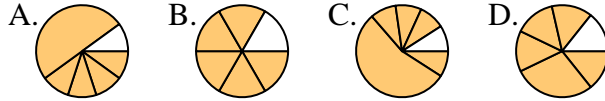
8. **C**

9) Which choice best shows $\frac{1}{4}$?



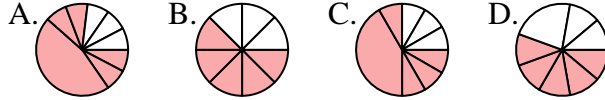
9. **C**

10) Which choice best shows $\frac{5}{6}$?



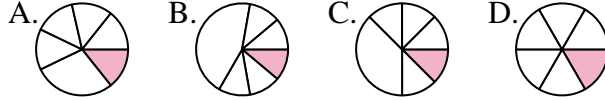
10. **B**

11) Which choice best shows $\frac{5}{8}$?



11. **B**

12) Which choice best shows $\frac{1}{6}$?



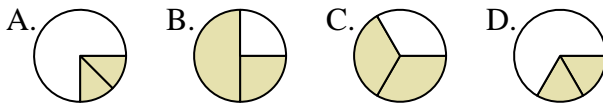
12. **D**



Determine which letter best represents each fraction.

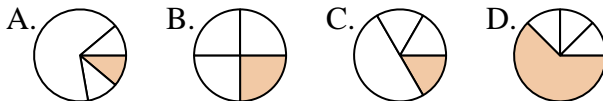
Answers

1) Which choice best shows $\frac{2}{3}$?



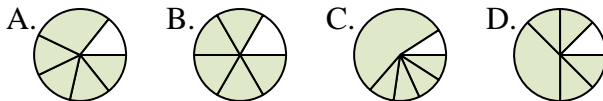
1. _____

2) Which choice best shows $\frac{1}{4}$?



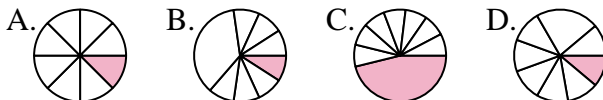
2. _____

3) Which choice best shows $\frac{5}{6}$?



3. _____

4) Which choice best shows $\frac{1}{8}$?



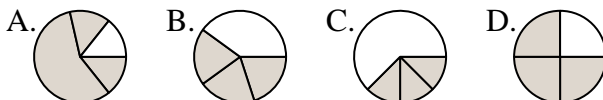
4. _____

5) Which choice best shows $\frac{1}{3}$?



5. _____

6) Which choice best shows $\frac{3}{4}$?



6. _____

7) Which choice best shows $\frac{3}{6}$?



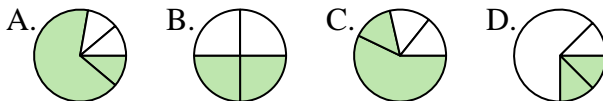
7. _____

8) Which choice best shows $\frac{3}{8}$?



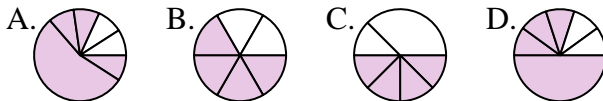
8. _____

9) Which choice best shows $\frac{2}{4}$?



9. _____

10) Which choice best shows $\frac{4}{6}$?



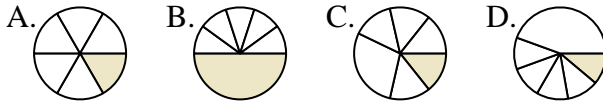
10. _____

11) Which choice best shows $\frac{2}{8}$?



11. _____

12) Which choice best shows $\frac{1}{6}$?

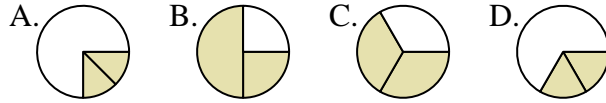


12. _____

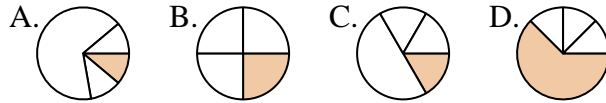


Determine which letter best represents each fraction.

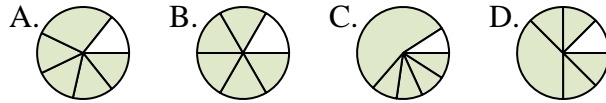
1) Which choice best shows $\frac{2}{3}$?



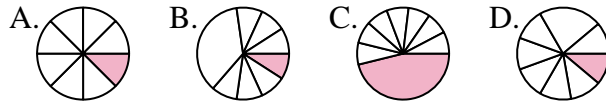
2) Which choice best shows $\frac{1}{4}$?



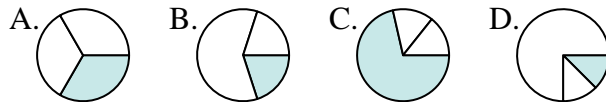
3) Which choice best shows $\frac{5}{6}$?



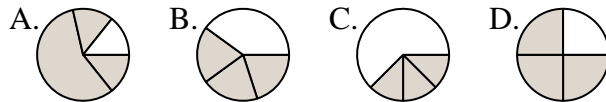
4) Which choice best shows $\frac{1}{8}$?



5) Which choice best shows $\frac{1}{3}$?



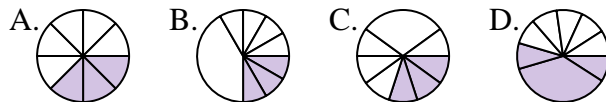
6) Which choice best shows $\frac{3}{4}$?



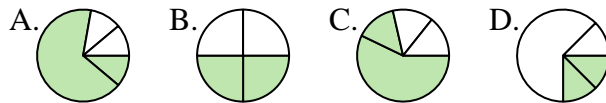
7) Which choice best shows $\frac{3}{6}$?



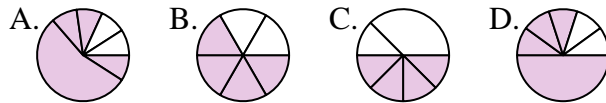
8) Which choice best shows $\frac{3}{8}$?



9) Which choice best shows $\frac{2}{4}$?



10) Which choice best shows $\frac{4}{6}$?



11) Which choice best shows $\frac{2}{8}$?



12) Which choice best shows $\frac{1}{6}$?



Answers

1. **C**

2. **B**

3. **B**

4. **A**

5. **A**

6. **D**

7. **A**

8. **A**

9. **B**

10. **B**

11. **C**

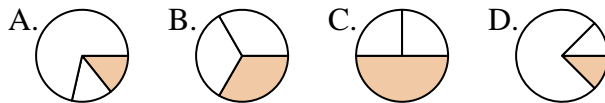
12. **A**



Determine which letter best represents each fraction.

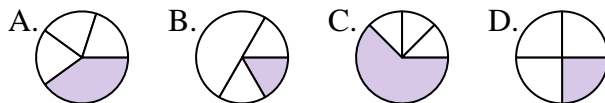
Answers

1) Which choice best shows $\frac{1}{3}$?



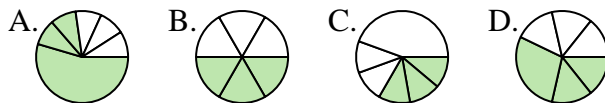
1. _____

2) Which choice best shows $\frac{1}{4}$?



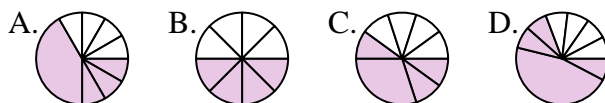
2. _____

3) Which choice best shows $\frac{3}{6}$?



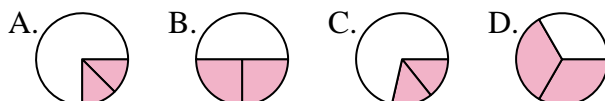
3. _____

4) Which choice best shows $\frac{4}{8}$?



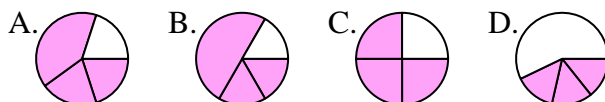
4. _____

5) Which choice best shows $\frac{2}{3}$?



5. _____

6) Which choice best shows $\frac{3}{4}$?



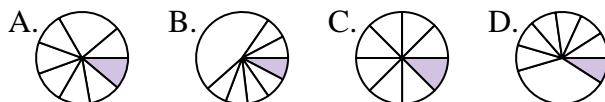
6. _____

7) Which choice best shows $\frac{4}{6}$?



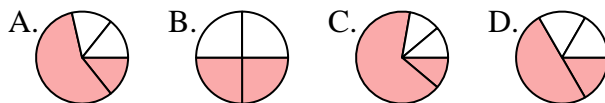
7. _____

8) Which choice best shows $\frac{1}{8}$?



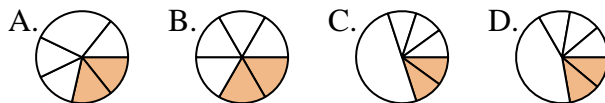
8. _____

9) Which choice best shows $\frac{2}{4}$?



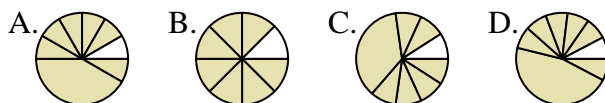
9. _____

10) Which choice best shows $\frac{2}{6}$?



10. _____

11) Which choice best shows $\frac{7}{8}$?



11. _____

12) Which choice best shows $\frac{1}{6}$?

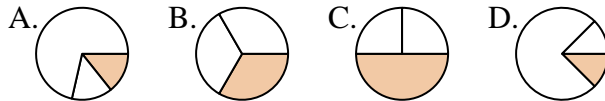


12. _____

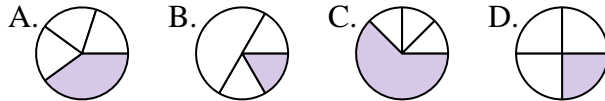


Determine which letter best represents each fraction.

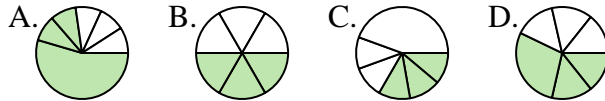
1) Which choice best shows $\frac{1}{3}$?



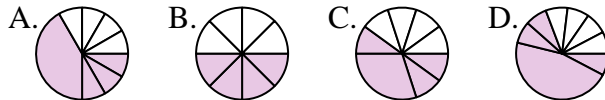
2) Which choice best shows $\frac{1}{4}$?



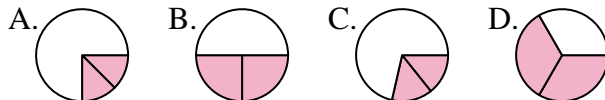
3) Which choice best shows $\frac{3}{6}$?



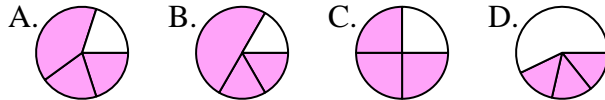
4) Which choice best shows $\frac{4}{8}$?



5) Which choice best shows $\frac{2}{3}$?



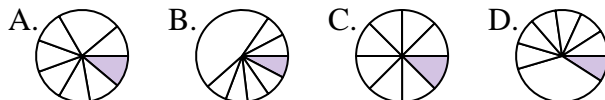
6) Which choice best shows $\frac{3}{4}$?



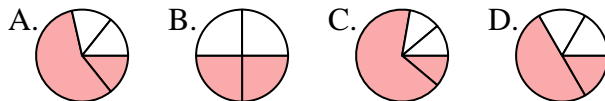
7) Which choice best shows $\frac{4}{6}$?



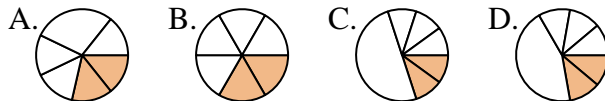
8) Which choice best shows $\frac{1}{8}$?



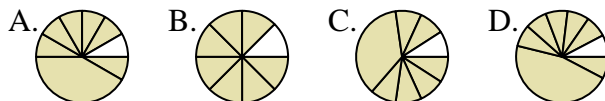
9) Which choice best shows $\frac{2}{4}$?



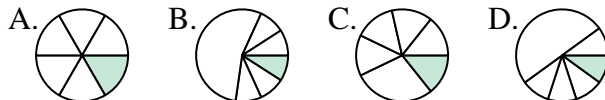
10) Which choice best shows $\frac{2}{6}$?



11) Which choice best shows $\frac{7}{8}$?



12) Which choice best shows $\frac{1}{6}$?



Answers

1. **B**

2. **D**

3. **B**

4. **B**

5. **D**

6. **C**

7. **C**

8. **C**

9. **B**

10. **B**

11. **B**

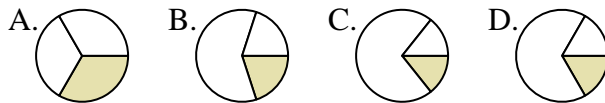
12. **A**



Determine which letter best represents each fraction.

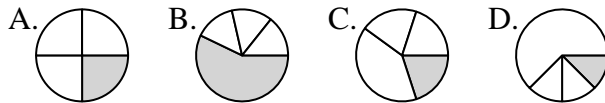
Answers

1) Which choice best shows $\frac{1}{3}$?



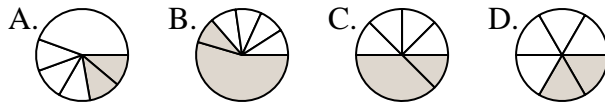
1. _____

2) Which choice best shows $\frac{1}{4}$?



2. _____

3) Which choice best shows $\frac{2}{6}$?



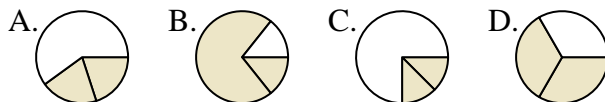
3. _____

4) Which choice best shows $\frac{7}{8}$?



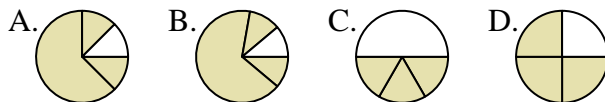
4. _____

5) Which choice best shows $\frac{2}{3}$?



5. _____

6) Which choice best shows $\frac{3}{4}$?



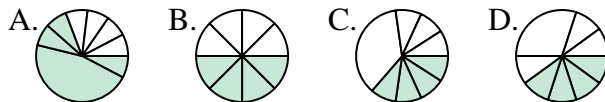
6. _____

7) Which choice best shows $\frac{4}{6}$?



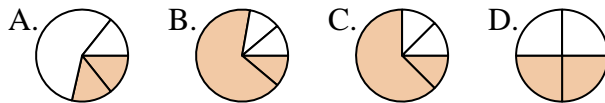
7. _____

8) Which choice best shows $\frac{4}{8}$?



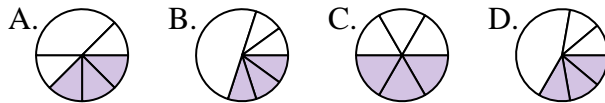
8. _____

9) Which choice best shows $\frac{2}{4}$?



9. _____

10) Which choice best shows $\frac{3}{6}$?



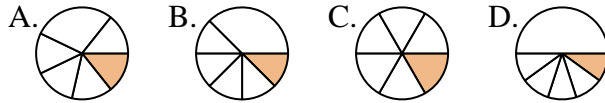
10. _____

11) Which choice best shows $\frac{6}{8}$?



11. _____

12) Which choice best shows $\frac{1}{6}$?

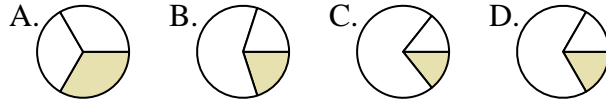


12. _____

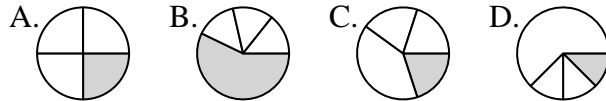


Determine which letter best represents each fraction.

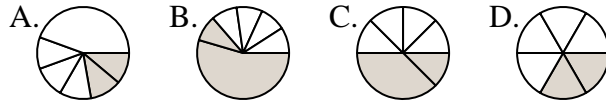
1) Which choice best shows $\frac{1}{3}$?



2) Which choice best shows $\frac{1}{4}$?



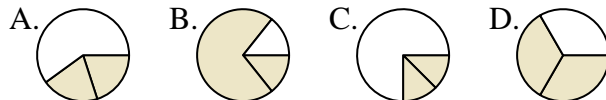
3) Which choice best shows $\frac{2}{6}$?



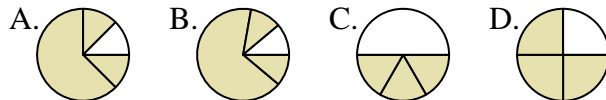
4) Which choice best shows $\frac{7}{8}$?



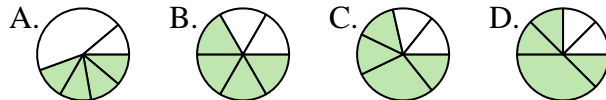
5) Which choice best shows $\frac{2}{3}$?



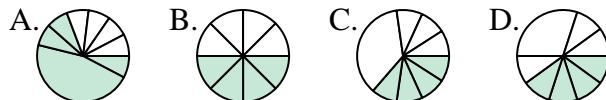
6) Which choice best shows $\frac{3}{4}$?



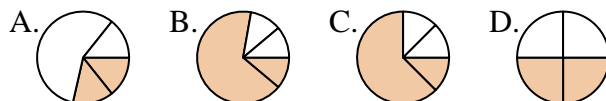
7) Which choice best shows $\frac{4}{6}$?



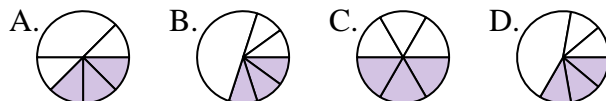
8) Which choice best shows $\frac{4}{8}$?



9) Which choice best shows $\frac{2}{4}$?



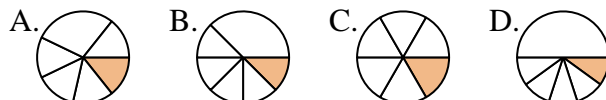
10) Which choice best shows $\frac{3}{6}$?



11) Which choice best shows $\frac{6}{8}$?



12) Which choice best shows $\frac{1}{6}$?



Answers

1. **A**

2. **A**

3. **D**

4. **A**

5. **D**

6. **D**

7. **B**

8. **B**

9. **D**

10. **C**

11. **C**

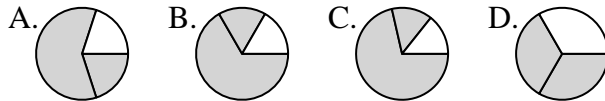
12. **C**



Determine which letter best represents each fraction.

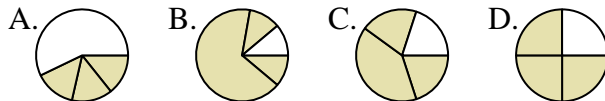
Answers

1) Which choice best shows $\frac{2}{3}$?



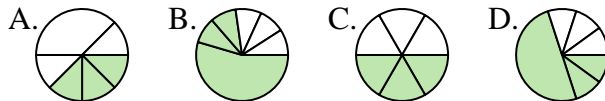
1. _____

2) Which choice best shows $\frac{3}{4}$?



2. _____

3) Which choice best shows $\frac{3}{6}$?



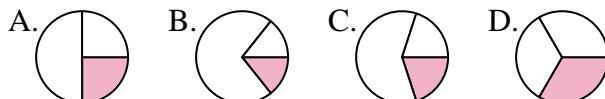
3. _____

4) Which choice best shows $\frac{5}{8}$?



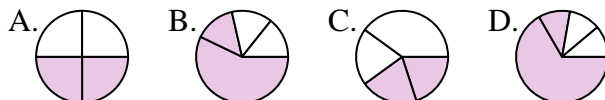
4. _____

5) Which choice best shows $\frac{1}{3}$?



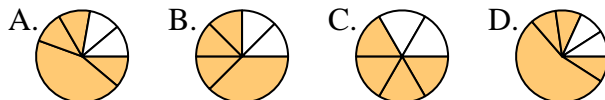
5. _____

6) Which choice best shows $\frac{2}{4}$?



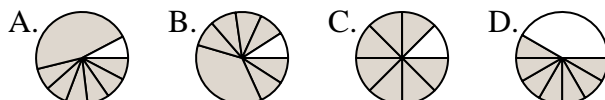
6. _____

7) Which choice best shows $\frac{4}{6}$?



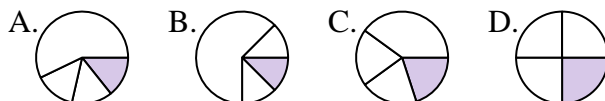
7. _____

8) Which choice best shows $\frac{7}{8}$?



8. _____

9) Which choice best shows $\frac{1}{4}$?



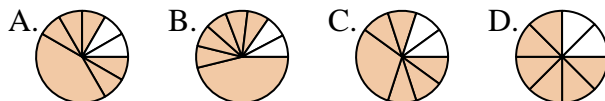
9. _____

10) Which choice best shows $\frac{2}{6}$?



10. _____

11) Which choice best shows $\frac{6}{8}$?



11. _____

12) Which choice best shows $\frac{5}{6}$?

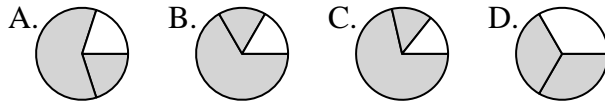


12. _____

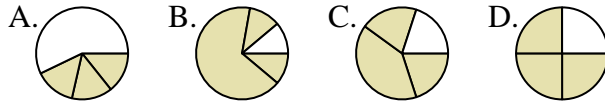


Determine which letter best represents each fraction.

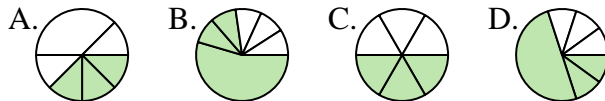
1) Which choice best shows $\frac{2}{3}$?



2) Which choice best shows $\frac{3}{4}$?



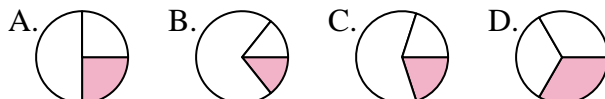
3) Which choice best shows $\frac{3}{6}$?



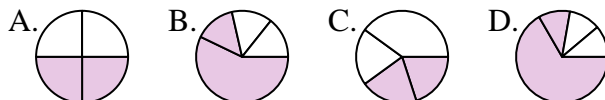
4) Which choice best shows $\frac{5}{8}$?



5) Which choice best shows $\frac{1}{3}$?



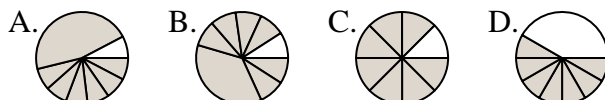
6) Which choice best shows $\frac{2}{4}$?



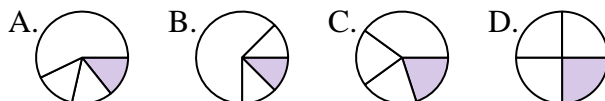
7) Which choice best shows $\frac{4}{6}$?



8) Which choice best shows $\frac{7}{8}$?



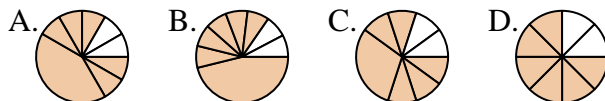
9) Which choice best shows $\frac{1}{4}$?



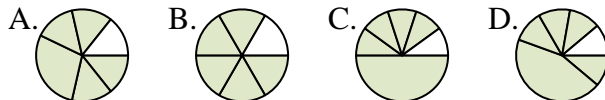
10) Which choice best shows $\frac{2}{6}$?



11) Which choice best shows $\frac{6}{8}$?



12) Which choice best shows $\frac{5}{6}$?



Answers

1. **D**

2. **D**

3. **C**

4. **A**

5. **D**

6. **A**

7. **C**

8. **C**

9. **D**

10. **D**

11. **D**

12. **B**